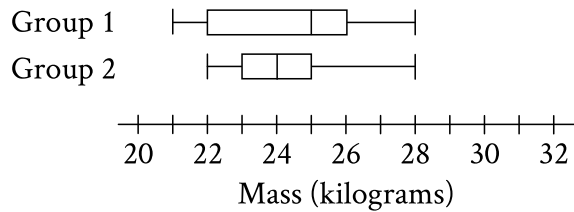


#1

ID: d3b9c8d8



The box plots summarize the masses, in kilograms, of two groups of gazelles. Based on the box plots, which of the following statements must be true?

- A) The mean mass of group 1 is greater than the mean mass of group 2.
- B) The mean mass of group 1 is less than the mean mass of group 2.
- C) The median mass of group 1 is greater than the median mass of group 2.
- D) The median mass of group 1 is less than the median mass of group 2.

#2

ID: 190be2fc

Data set A consists of 10 positive integers less than 60. The list shown gives 9 of the integers from data set A.

43, 45, 44, 43, 38, 39, 40, 46, 40

The mean of these 9 integers is 42. If the mean of data set A is an integer that is greater than 42, what is the value of the largest integer from data set A?

#3

ID: c178d4da

Value	Data set A frequency	Data set B frequency
30	2	9
34	4	7
38	5	5
42	7	4
46	9	2

Data set A and data set B each consist of 27 values. The table shows the frequencies of the values for each data set. Which of the following statements best compares the means of the two data sets?

- A) The mean of data set A is greater than the mean of data set B.
- B) The mean of data set A is less than the mean of data set B.
- C) The mean of data set A is equal to the mean of data set B.
- D) There is not enough information to compare the means of the data sets.

#4

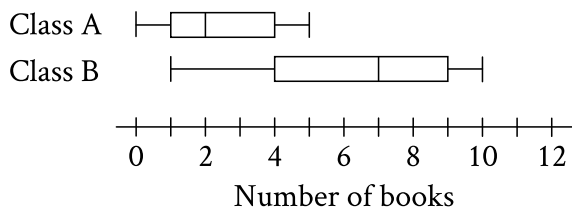
ID: 457d2f2c

A data set of 27 different numbers has a mean of 33 and a median of 33. A new data set is created by adding 7 to each number in the original data set that is greater than the median and subtracting 7 from each number in the original data set that is less than the median. Which of the following measures does NOT have the same value in both the original and new data sets?

- A) Median
- B) Mean
- C) Sum of the numbers
- D) Standard deviation

#5

ID: 6c9444cd

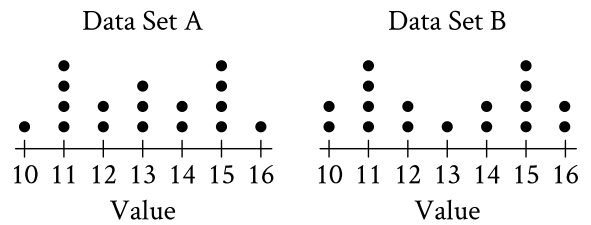


The two box plots show the distribution of number of books read over the summer by the students in two different English classes. What is the positive difference between the ranges of number of books read over the summer for the two classes?

#6

ID: d65b9a87

The dot plots represent the distributions of values in data sets A and B.



Which of the following statements must be true?

- I. The median of data set A is equal to the median of data set B.
 - II. The standard deviation of data set A is equal to the standard deviation of data set B.
- A) I only
 - B) II only
 - C) I and II
 - D) Neither I nor II

#7

ID: ecdbbe84

The table shown summarizes the number of employees at each of the 17 restaurants in a town.

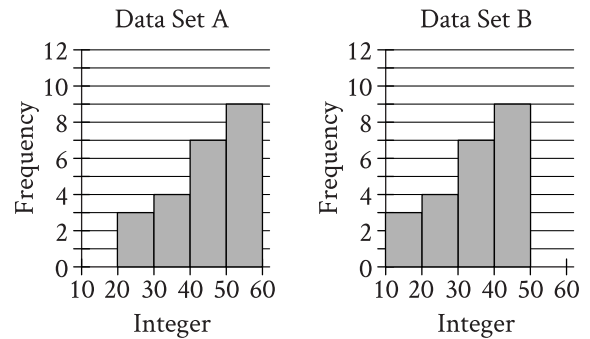
Number of employees	Number of restaurants
2 to 7	2
8 to 13	4
14 to 19	2
20 to 25	7
26 to 31	2

Which of the following could be the median number of employees for the restaurants in this town?

- A) 2
- B) 9
- C) 15
- D) 21

#8

ID: f8a322d9



Two data sets of 23 integers each are summarized in the histograms shown. For each of the histograms, the first interval represents the frequency of integers greater than or equal to 10, but less than 20. The second interval represents the frequency of integers greater than or equal to 20, but less than 30, and so on. What is the smallest possible difference between the mean of data set A and the mean of data set B?

- A) 0
- B) 1
- C) 10
- D) 23

#9

ID: 1142af44

Value Frequency

1	a
2	$2a$
3	$3a$
4	$2a$
5	a

The frequency distribution above summarizes a set of data, where a is a positive integer. How much greater is the mean of the set of data than the median?

- A) 0
- B) 1
- C) 2
- D) 3

#10

ID: 651d83bb

Two different teams consisting of 10 members each ran in a race. Each member's completion time of the race was recorded. The mean of the completion times for each team was calculated and is shown below.

Team A: 3.41 minutes

Team B: 3.79 minutes

Which of the following **MUST** be true?

1. Every member of team A completed the race in less time than any member of team B.
 2. The median time it took the members of team B to complete the race is greater than the median time it took the members of team A to complete the race.
 3. There is at least one member of team B who took more time to complete the race than some member of team A.
- A) III only
 - B) I and III only
 - C) II and III only
 - D) I, II, and III

#11

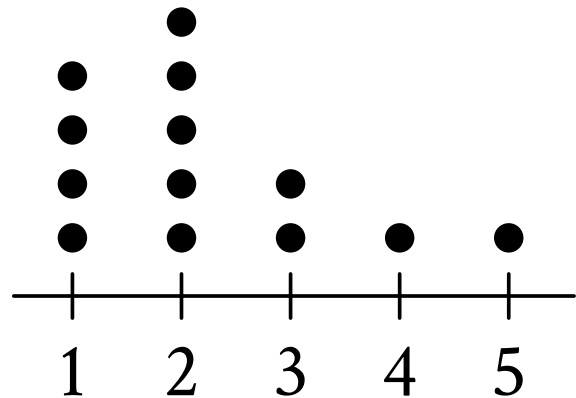
ID: 1e8ccffd

The mean score of 8 players in a basketball game was 14.5 points. If the highest individual score is removed, the mean score of the remaining 7 players becomes 12 points. What was the highest score?

- A) 20
- B) 24
- C) 32
- D) 36

#12

ID: e7d48c8a



Number of bursts

The dot plot represents a data set of the number of bursts for 13 eruptions of a steam vent. If an additional eruption with 11 bursts is added to this data set to create a new data set of 14 eruptions, which of the following measures will be greater for the new data set than for the original data set?

- I. The median number of bursts
 - II. The mean number of bursts
- A) I and II
 - B) I only
 - C) II only
 - D) Neither I nor II

#13

ID: bf47ad54

Each of the following frequency tables represents a data set. Which data set has the greatest mean?

A)

Value	Frequency
70	4
80	5
90	6
100	7

B)

Value	Frequency
70	6
80	6
90	6
100	6

C)

Value	Frequency
70	7
80	6
90	6
100	7

D)

Value	Frequency
70	8
80	5
90	5
100	8

#14

ID: 4ff597db

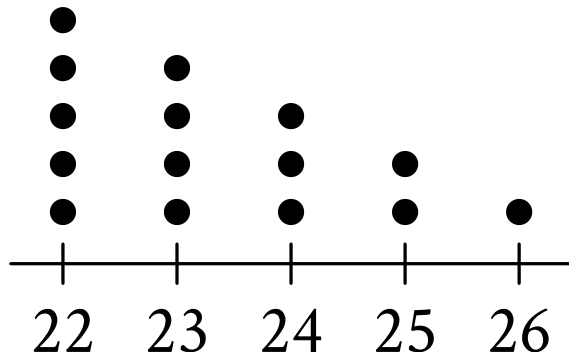
The mean amount of time that the 20 employees of a construction company have worked for the company is 6.7 years. After one of the employees leaves the company, the mean amount of time that the remaining employees have worked for the company is reduced to 6.25 years. How many years did the employee who left the company work for the company?

- A) 0.45
- B) 2.30
- C) 9.00
- D) 15.25

#15

ID: 4626102e

Data Set A



The dot plot represents the 15 values in data set A. Data set B is created by adding 56 to each of the values in data set A. Which of the following correctly compares the medians and the ranges of data sets A and B?

- A) The median of data set B is equal to the median of data set A, and the range of data set B is equal to the range of data set A.
- B) The median of data set B is equal to the median of data set A, and the range of data set B is greater than the range of data set A.
- C) The median of data set B is greater than the median of data set A, and the range of data set B is equal to the range of data set A.
- D) The median of data set B is greater than the median of data set A, and the range of data set B is greater than the range of data set A.

#16

ID: 98958ae8

Data set A consists of the heights of 75 objects and has a mean of 25 meters. Data set B consists of the heights of 50 objects and has a mean of 65 meters. Data set C consists of the heights of the 125 objects from data sets A and B. What is the mean, in meters, of data set C?

#17

ID: 391ae4b2

Data set F consists of 55 integers between 170 and 290. Data set G consists of all the integers in data set F as well as the integer 10. Which of the following must be less for data set F than for data set G?

- I. The mean
 - II. The median
- A) I only
 - B) II only
 - C) I and II
 - D) Neither I nor II

#18

ID: 2a59eb45

Data set A consists of the heights of 75 buildings and has a mean of 32 meters. Data set B consists of the heights of 50 buildings and has a mean of 62 meters. Data set C consists of the heights of the 125 buildings from data sets A and B. What is the mean, in meters, of data set C?

#19

ID: 9d935bd8

Percent of Residents Who Earned a Bachelor's Degree or Higher

State	Percent of residents
State A	21.9%
State B	27.9%
State C	25.9%
State D	19.5%
State E	30.1%
State F	36.4%
State G	35.5%

A survey was given to residents of all 50 states asking if they had earned a bachelor's degree or higher. The results from 7 of the states are given in the table above. The median percent of residents who earned a bachelor's degree or higher for all 50 states was 26.95%. What is the difference between the median percent of residents who earned a bachelor's degree or higher for these 7 states and the median for all 50 states?

- A) 0.05%
- B) 0.95%
- C) 1.22%
- D) 7.45%

#20

ID: 54d93874

Masses (kilograms)

Andrew	2.4	2.5	3.6	3.1	2.5	2.7
Maria	x	3.1	2.7	2.9	3.3	2.8

Andrew and Maria each collected six rocks, and the masses of the rocks are shown in the table above. The mean of the masses of the rocks Maria collected is 0.1 kilogram greater than the mean of the masses of the rocks Andrew collected. What is the value of x ?

#21

ID: 94237701

For a certain computer game, individuals receive an integer score that ranges from 2 through 10. The table below shows the frequency distribution of the scores of the 9 players in group A and the 11 players in group B.

Score	Score Frequencies	
	Group A	Group B
2	1	0
3	1	0
4	2	0
5	1	4
6	3	2
7	0	0
8	0	2
9	1	1
10	0	2
Total	9	11

The median of the scores for group B is how much greater than the median of the scores for group A?